



UNIVERSITY OF CAMBRIDGE INTERNATIONAL EXAMINATIONS  
International General Certificate of Secondary Education

CANDIDATE  
NAME

CENTRE  
NUMBER

--	--	--	--	--

CANDIDATE  
NUMBER

--	--	--	--	--



**MATHEMATICS**

**0580/22**

Paper 2 (Extended)

**October/November 2009**

**1 hour 30 minutes**

Candidates answer on the Question Paper.

Additional Materials:

Electronic calculator  
Mathematical tables (optional)

Geometrical instruments  
Tracing paper (optional)

**READ THESE INSTRUCTIONS FIRST**

Write your Centre number, candidate number and name on all the work you hand in.

Write in dark blue or black pen.

You may use a pencil for any diagrams or graphs.

Do not use staples, paper clips, highlighters, glue or correction fluid.

Answer **all** questions.

If working is needed for any question it must be shown below that question.

Electronic calculators should be used.

If the degree of accuracy is not specified in the question, and if the answer is not exact, give the answer to three significant figures. Give answers in degrees to one decimal place.

For  $\pi$ , use either your calculator value or 3.142.

At the end of the examination, fasten all your work securely together.


The number of marks is given in brackets [ ] at the end of each question or part question.

The total of the marks for this paper is 70.

This document consists of **12** printed pages.



1



For the diagram above write down

(a) the order of rotational symmetry,

Answer(a) ..... [1]

(b) the number of lines of symmetry.

Answer(b) ..... [1]

2 Write down the next two prime numbers after 31.

Answer ..... and ..... [2]

3 Use your calculator to find the value of  $\frac{(\cos 30^\circ)^2 - (\sin 30^\circ)^2}{2(\sin 120^\circ)(\cos 120^\circ)}$ .

Answer ..... [2]

4 Simplify  $\frac{5}{8}x^{\frac{3}{2}} \div \frac{1}{2}x^{-\frac{5}{2}}$ .

Answer ..... [2]

For  
Examiner's  
Use

- 5 In 1977 the population of China was  $9.5 \times 10^8$ .  
 In 2007 the population of China was  $1.322 \times 10^9$ .  
 Calculate the population in 2007 as a percentage of the population in 1977.

For  
Examiner's  
Use

Answer ..... % [2]

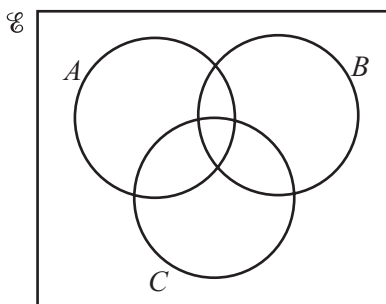
6

$$\mathbf{A} = \begin{pmatrix} 0 & 1 \\ -4 & -12 \end{pmatrix} \quad \mathbf{B} = \begin{pmatrix} 3 & 4 \\ 0 & -4 \end{pmatrix}$$

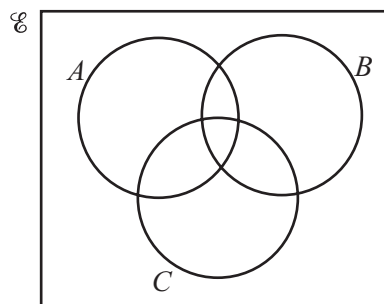
Calculate the value of  $5|\mathbf{A}| + |\mathbf{B}|$ , where  $|\mathbf{A}|$  and  $|\mathbf{B}|$  are the determinants of  $\mathbf{A}$  and  $\mathbf{B}$ .

Answer ..... [2]

- 7 Shade the region required in each Venn Diagram.



$$B' \cap (A \cap C)$$



$$B' \cap (A \cup C)$$

[2]

- 8 Find the length of the line joining the points  $A(-2, 10)$  and  $B(-8, 2)$ .

For  
Examiner's  
Use

Answer  $AB =$  ..... [2]

---

- 9 Solve the simultaneous equations

$$\begin{aligned}6x + 18y &= 57, \\2x - 3y &= -8.\end{aligned}$$

Answer  $x =$  .....  
 $y =$  ..... [3]

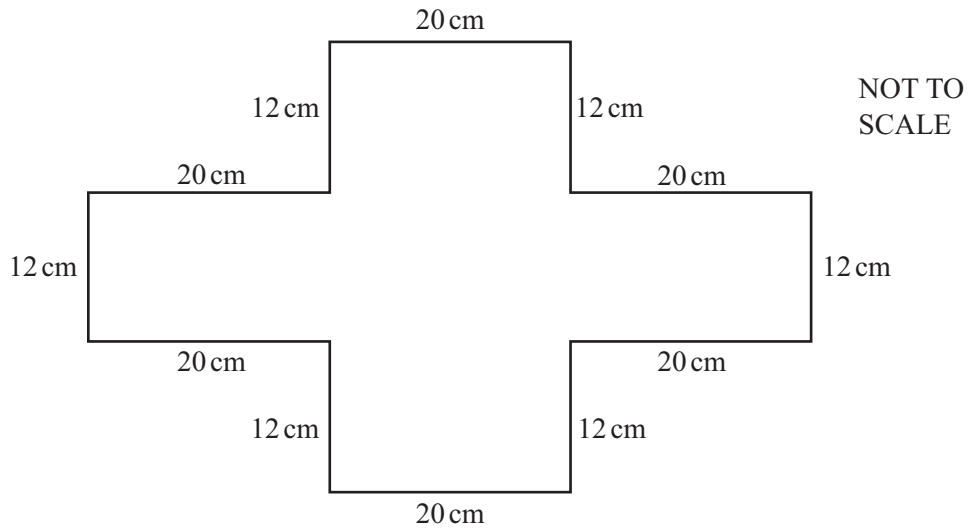
---

- 10 The braking distance,  $d$ , of a car is directly proportional to the square of its speed,  $v$ .  
When  $d = 2$ ,  $v = 5$ .  
Find  $d$  when  $v = 40$ .

Answer  $d =$  ..... [3]

---

11

For  
Examiner's  
Use

Each of the lengths 20 cm and 12 cm is measured correct to the nearest centimetre.  
Calculate the upper bound for the perimeter of the shape.

*Answer* ..... cm [3]

12 Simplify  $16 - 4(3x - 2)^2$ .

*Answer* ..... [3]

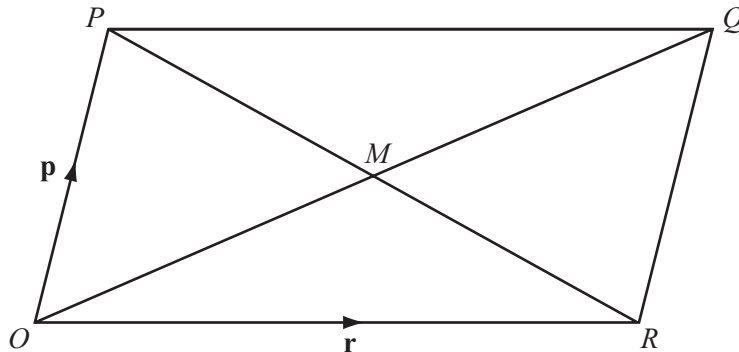
- 13 Solve the inequality  $6(2 - 3x) - 4(1 - 2x) \leq 0$ .

Answer ..... [3]

- 14 Zainab borrows \$249 from a bank to pay for a new bed.  
The bank charges compound interest at 1.7% per month.  
Calculate how much **interest** she owes at the end of 3 months.  
Give your answer correct to 2 decimal places.

Answer \$ ..... [3]

15



$O$  is the origin and  $OPQR$  is a parallelogram whose diagonals intersect at  $M$ .

The vector  $\vec{OP}$  is represented by  $\mathbf{p}$  and the vector  $\vec{OR}$  is represented by  $\mathbf{r}$ .

- (a) Write down a single vector which is represented by

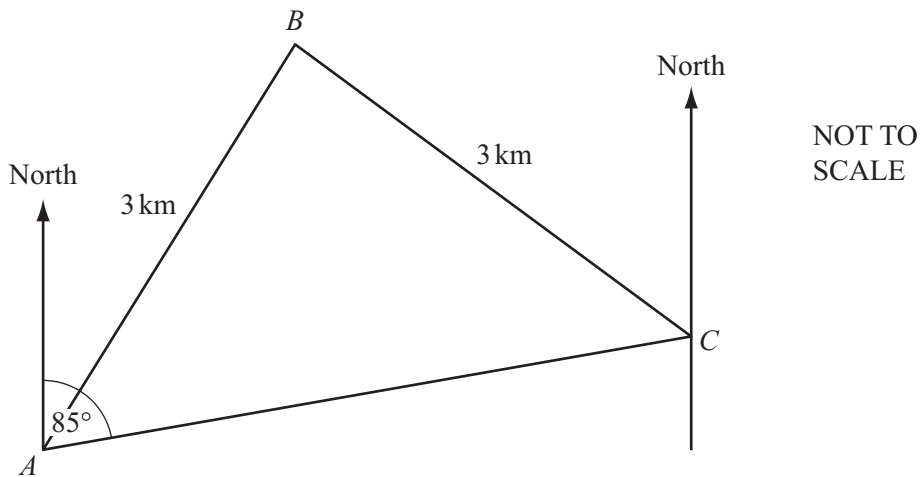
(i)  $\mathbf{p} + \mathbf{r}$ ,

Answer(a)(i) ..... [1]

(ii)  $\frac{1}{2}\mathbf{p} - \frac{1}{2}\mathbf{r}$ .

Answer(a)(ii) ..... [1]

- (b) On the diagram, mark with a cross (x) and label with the letter  $S$  the point with position vector  $\frac{1}{2}\mathbf{p} + \frac{3}{4}\mathbf{r}$ . [2]



$A$ ,  $B$  and  $C$  are three places in a desert. Tom leaves  $A$  at 06 40 and takes 30 minutes to walk directly to  $B$ , a distance of 3 kilometres. He then takes an hour to walk directly from  $B$  to  $C$ , also a distance of 3 kilometres.

(a) At what time did Tom arrive at  $C$ ?

Answer (a) ..... [1]

(b) Calculate his average speed for the whole journey.

Answer (b) ..... km/h [2]

(c) The bearing of  $C$  from  $A$  is  $085^\circ$ .  
Find the bearing of  $A$  from  $C$ .

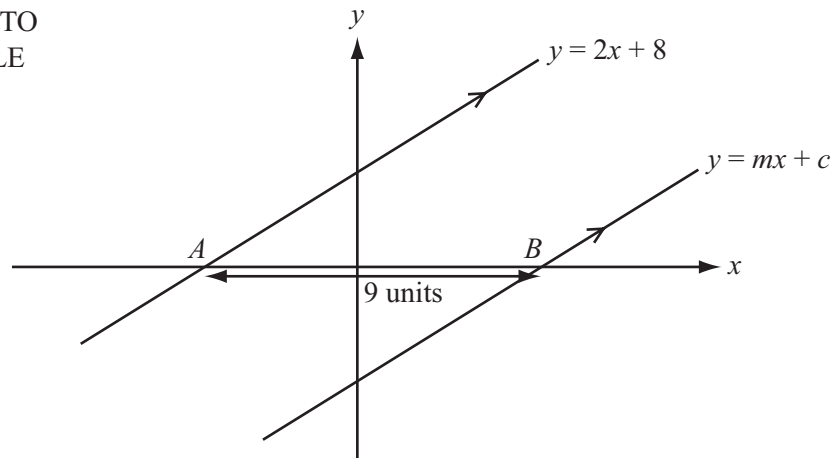
Answer (c) ..... [1]

17 (a) In 2007, a tourist changed 4000 Chinese Yuan into pounds (£) when the exchange rate was £1 = 15.2978 Chinese Yuan.  
Calculate the amount he received, giving your answer correct to 2 decimal places.

Answer(a) £ ..... [2]

(b) In 2006, the exchange rate was £1 = 15.9128 Chinese Yuan.  
Calculate the percentage decrease in the number of Chinese Yuan for each £1 from 2006 to 2007.

Answer(b) ..... % [2]

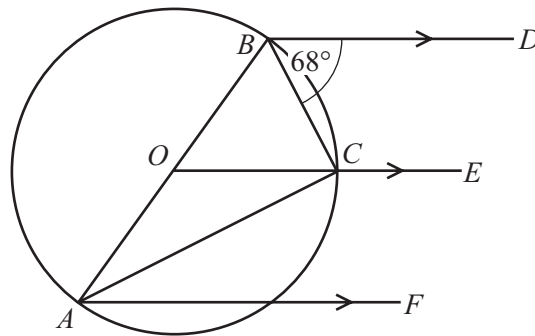
NOT TO  
SCALE

The line  $y = mx + c$  is parallel to the line  $y = 2x + 8$ .  
The distance  $AB$  is 9 units.

Find the value of  $m$  and the value of  $c$ .

Answer  $m = \dots\dots\dots$  and  $c = \dots\dots\dots$  [4]



NOT TO  
SCALE

Points  $A$ ,  $B$  and  $C$  lie on a circle, centre  $O$ , with diameter  $AB$ .  
 $BD$ ,  $OCE$  and  $AF$  are parallel lines.  
 Angle  $CBD = 68^\circ$ .

Calculate

(a) angle  $BOC$ ,

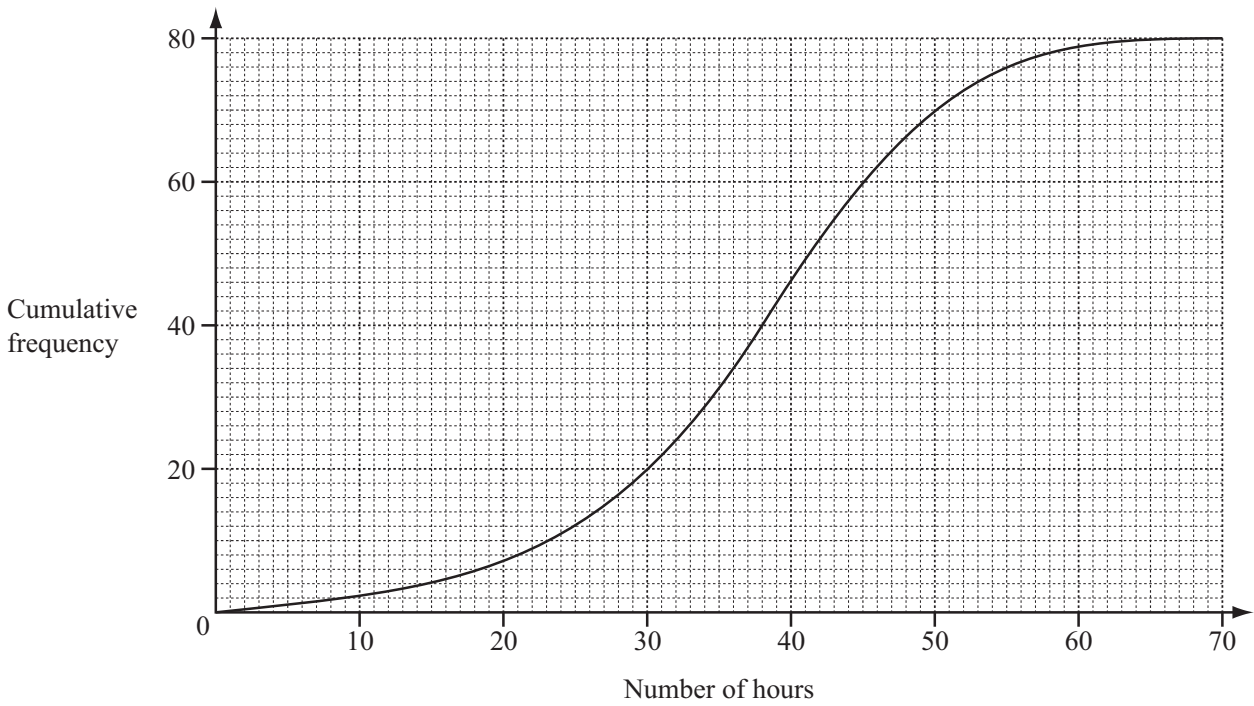
Answer(a) Angle  $BOC = \dots\dots\dots$  [2]

(b) angle  $ACE$ .

Answer(b) Angle  $ACE = \dots\dots\dots$  [2]

- 20 The number of hours that a group of 80 students spent using a computer in a week was recorded. The results are shown by the cumulative frequency curve.

For  
Examiner's  
Use



Use the cumulative frequency curve to find

- (a) the median,

Answer(a) ..... h [1]

- (b) the upper quartile,

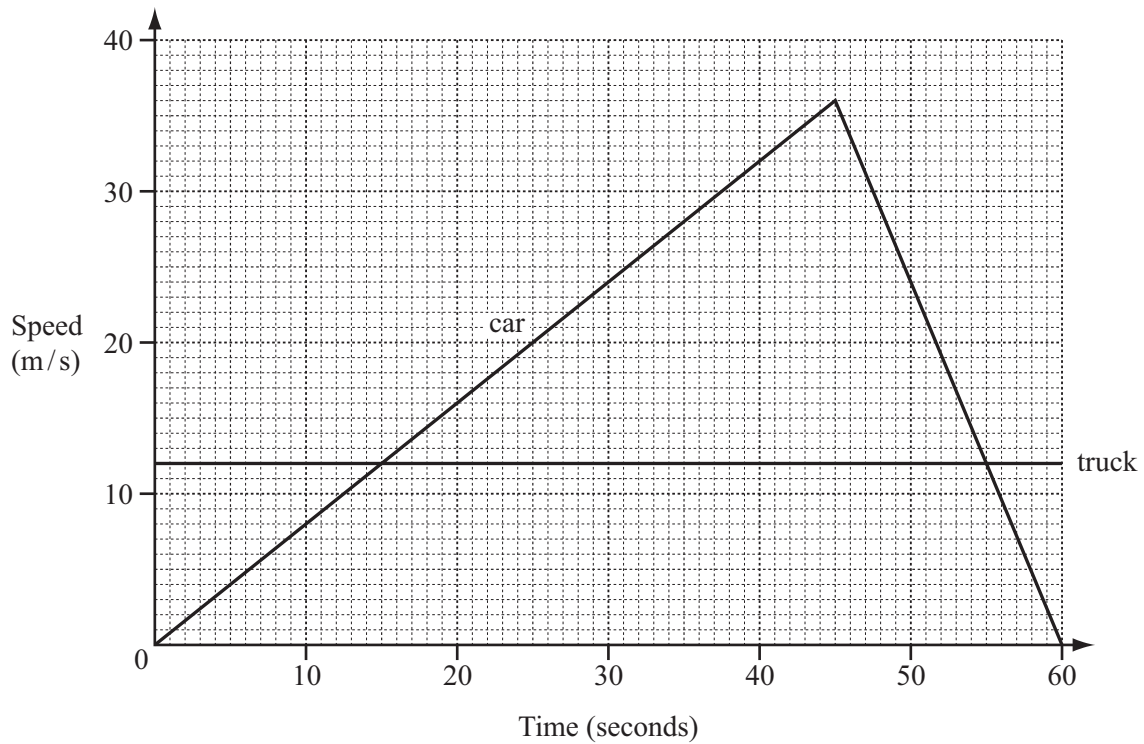
Answer(b) ..... h [1]

- (c) the interquartile range,

Answer(c) ..... h [1]

- (d) the number of students who spent more than 50 hours using a computer in a week.

Answer(d) ..... [2]



The graph shows the speed of a truck and a car over 60 seconds.

(a) Calculate the acceleration of the car over the first 45 seconds.

Answer(a) ..... m/s<sup>2</sup> [2]

(b) Calculate the distance travelled by the car while it was travelling faster than the truck.

Answer(b) ..... m [3]

Question 22 is printed on the next page.

22

$f(x) = 4x + 1$

$g(x) = x^3 + 1$

$h(x) = \frac{2x + 1}{3}$

For  
Examiner's  
Use

(a) Find the value of  $gf(0)$ .

*Answer(a)* ..... [2]

(b) Find  $fg(x)$ . Simplify your answer.

*Answer(b)* ..... [2]

(c) Find  $h^{-1}(x)$ .

*Answer(c)* ..... [2]

Permission to reproduce items where third-party owned material protected by copyright is included has been sought and cleared where possible. Every reasonable effort has been made by the publisher (UCLES) to trace copyright holders, but if any items requiring clearance have unwittingly been included, the publisher will be pleased to make amends at the earliest possible opportunity.

University of Cambridge International Examinations is part of the Cambridge Assessment Group. Cambridge Assessment is the brand name of University of Cambridge Local Examinations Syndicate (UCLES), which is itself a department of the University of Cambridge.